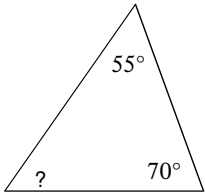


Practice Problems

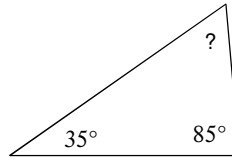
© 2013 Kuta Software LLC. All rights reserved.

Find the measure of each angle indicated.

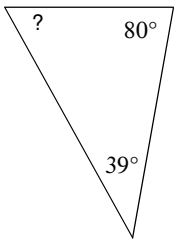
1)



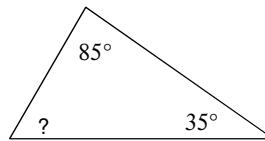
2)



3)

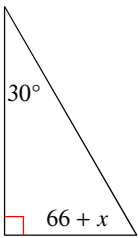


4)

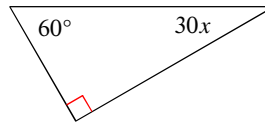


Solve for  $x$ .

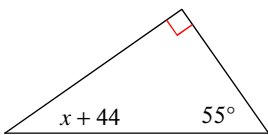
5)



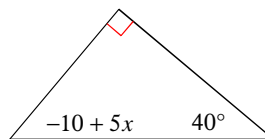
6)



7)

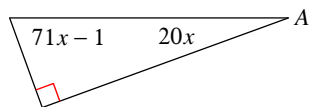


8)

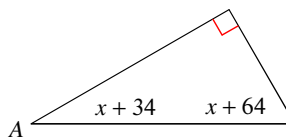


Find the measure of angle A.

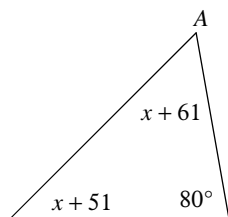
9)



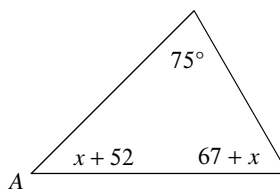
10)



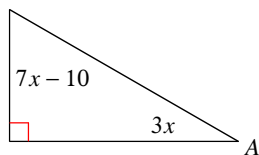
11)



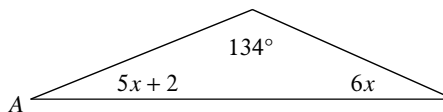
12)



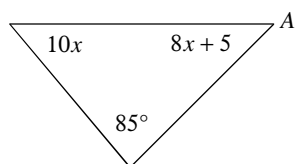
13)



14)



15)



16)

